

area

rectangle: lw

triangle: $\frac{1}{2}bh$

Surface Area

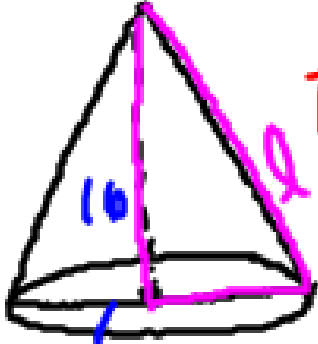
1, 2: add all faces

3: $2\pi rh + 2\pi r^2$

4: $\frac{1}{2}Pl + B$

5: $\pi rl + \pi r^2$

6: $4\pi r^2$

7:  $\pi rl + \pi r^2$

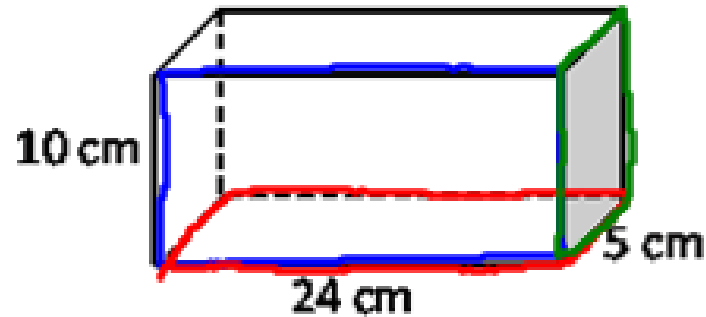
$16^2 + 12^2 = l^2$

24

8: $C = \pi d$ to find r
 $\frac{18}{9} = \frac{\pi d}{\pi}$

$4\pi r = \bigcirc = d$

1.



$$10 \times 24 = 240$$

$$5 \times 24 = 120$$

$$10 \times 5 = 50$$

240

240

120

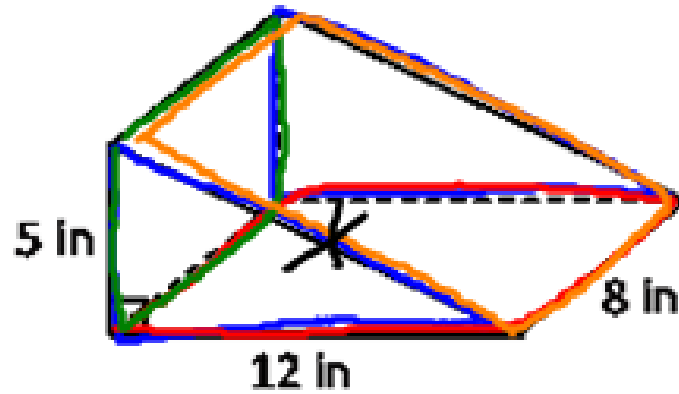
120

50

+ 50

820 cm²

2.



$$\frac{1}{2} \cdot 12 \cdot 5 = 30$$

$$12 \times 8 = 96$$

$$5 \times 8 = 40$$

$$13 \times 8 = 104$$

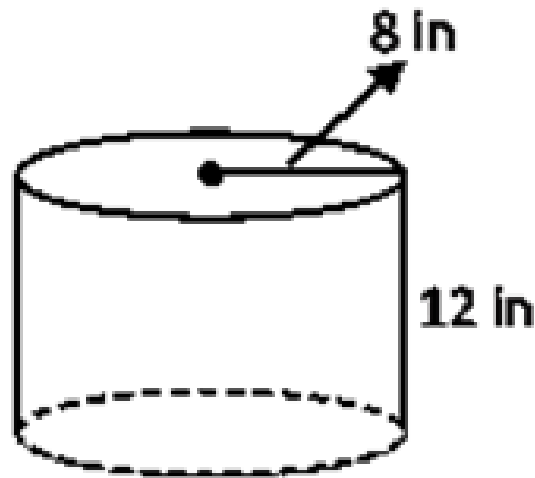
$$\begin{array}{r} 30 \\ 30 \\ 96 \\ 40 \\ + 104 \\ \hline 300 \text{ in}^2 \end{array}$$

$$5^2 + 12^2 = x^2$$
$$25 + 144 = x^2$$

$$169 = x^2$$

$$13 = x$$

3.



$$SA = 2\pi rh + 2\pi r^2$$

$$2 \cdot \pi \cdot 8 \cdot 12 + 2 \cdot \pi \cdot 8^2$$

$$192\pi + 128\pi$$

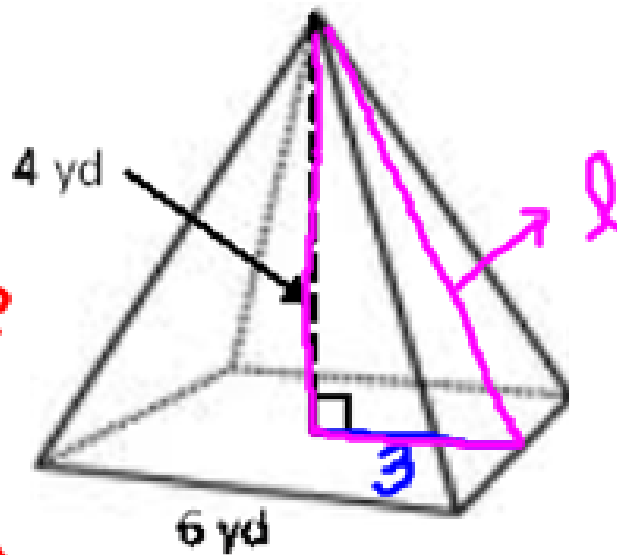
$$320\pi$$

$$1005.3 \text{ in}^2$$

4.

perimeter
of
base

area
of base



$$SA = \frac{1}{2}Pl + B$$

$$\frac{1}{2} \cdot 24 \cdot 5 + 36$$

$$60 + 36$$

$$96 \text{ yd}^2$$

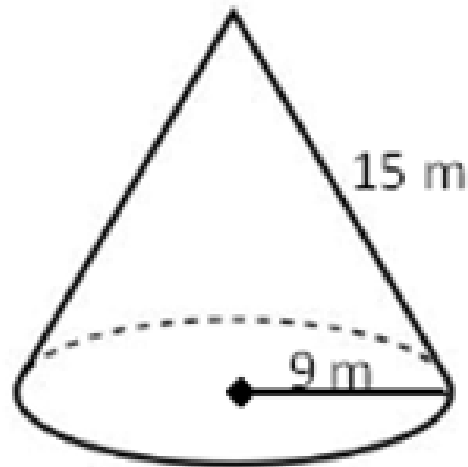
$$4^2 + 3^2 = l^2$$

$$16 + 9 = l^2$$

$$25 = l^2$$

$$5 = l$$

5.



$$SA = \pi r l + \pi r^2$$

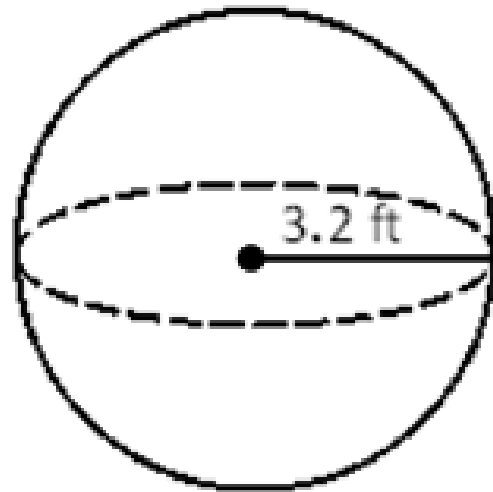
$$\pi \cdot 9 \cdot 15 + \pi \cdot 9^2$$

$$135\pi + 81\pi$$

$$216\pi$$

$$678.6 \text{ m}^2$$

6.

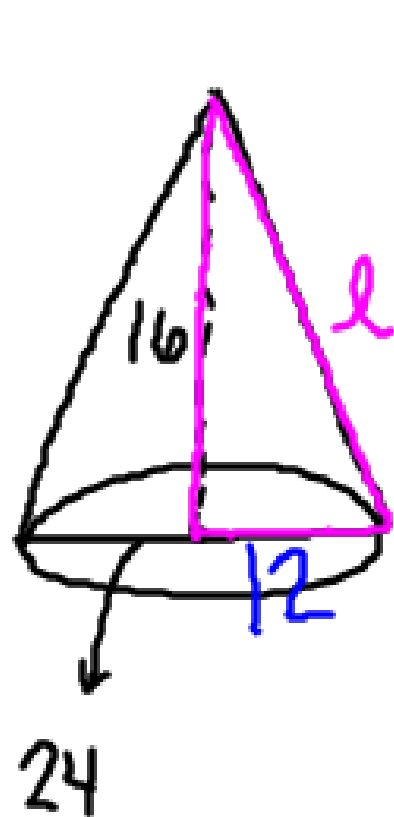


$$SA = 4\pi r^2$$

$$4 \cdot \pi \cdot 3.2^2$$

$$128.7 \text{ ft}^2$$

7. Find the surface area of a cone with an altitude of 16 cm and diameter of 24 cm.



$$\begin{aligned}16^2 + 12^2 &= l^2 \\256 + 144 &= l^2 \\400 &= l^2 \\20 &= l\end{aligned}$$

$$\begin{aligned}\pi r l + \pi r^2 \\ \pi \cdot 12 \cdot 20 + \pi \cdot 12^2 \\ 240\pi + 144\pi \\ 384\pi \\ 1206.4 \text{ cm}^2\end{aligned}$$

8. Find the surface area of a sphere whose great circle has a circumference of 18 mm.

$$C = \pi d$$

$$\frac{18}{\pi} = \frac{\pi d}{\pi}$$

$$5.73 = d$$

$$2.9 = r$$

$$SA = 4\pi r^2$$

$$4 \cdot \pi \cdot 2.9^2$$

$$105.7 \text{ mm}^2$$